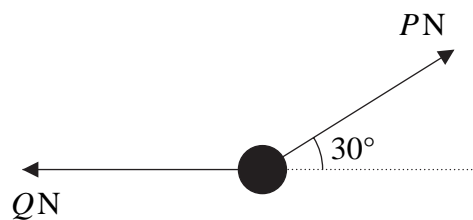




1.

Figure 1



A particle of weight 24 N is held in equilibrium by two light inextensible strings. One string is horizontal. The other string is inclined at an angle of  $30^\circ$  to the horizontal, as shown in Figure 1. The tension in the horizontal string is  $Q$  newtons and the tension in the other string is  $P$  newtons. Find

(a) the value of  $P$ , (3)

(b) the value of  $Q$ . (3)

---

---

---

---

---

---

---

---

---

---

---

---

---

---

---

---

---

---

---

---

---

---

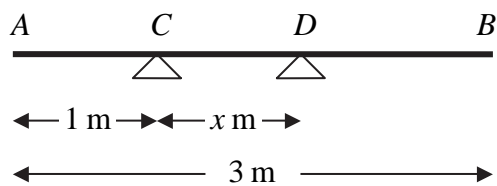
---

---



2.

Figure 2



A uniform plank  $AB$  has weight  $120\text{ N}$  and length  $3\text{ m}$ . The plank rests horizontally in equilibrium on two smooth supports  $C$  and  $D$ , where  $AC = 1\text{ m}$  and  $CD = x\text{ m}$ , as shown in Figure 2. The reaction of the support on the plank at  $D$  has magnitude  $80\text{ N}$ . Modelling the plank as a rod,

(a) show that  $x = 0.75$  (3)

A rock is now placed at  $B$  and the plank is on the point of tilting about  $D$ . Modelling the rock as a particle, find

(b) the weight of the rock, (4)

(c) the magnitude of the reaction of the support on the plank at  $D$ . (2)

(d) State how you have used the model of the rock as a particle. (1)

---

---

---

---

---

---

---

---

---

---

---

---

---

---

---

---

---

---

---

---

---

---

---

---

---

---











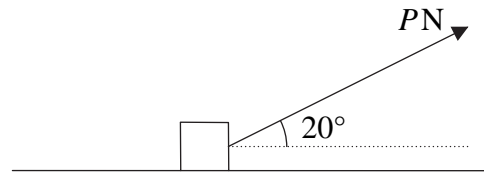






6.

Figure 3



A box of mass 30 kg is being pulled along rough horizontal ground at a constant speed using a rope. The rope makes an angle of  $20^\circ$  with the ground, as shown in Figure 3. The coefficient of friction between the box and the ground is 0.4. The box is modelled as a particle and the rope as a light, inextensible string. The tension in the rope is  $P$  newtons.

(a) Find the value of  $P$ . (8)

The tension in the rope is now increased to 150 N.

(b) Find the acceleration of the box. (6)

---

---

---

---

---

---

---

---

---

---

---

---

---

---

---

---

---

---

---

---

---

---

---

---

---

---

---

---

---

---





7.

Figure 4

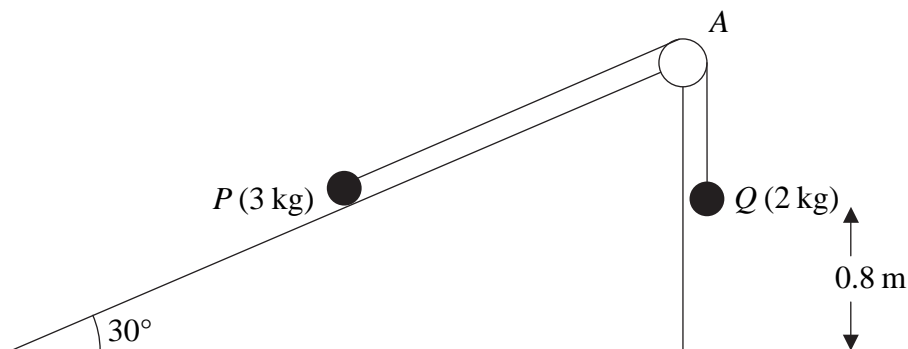


Figure 4 shows two particles  $P$  and  $Q$ , of mass 3 kg and 2 kg respectively, connected by a light inextensible string. Initially  $P$  is held at rest on a fixed smooth plane inclined at  $30^\circ$  to the horizontal. The string passes over a small smooth light pulley  $A$  fixed at the top of the plane. The part of the string from  $P$  to  $A$  is parallel to a line of greatest slope of the plane. The particle  $Q$  hangs freely below  $A$ . The system is released from rest with the string taut.

(a) Write down an equation of motion for  $P$  and an equation of motion for  $Q$ . (4)

(b) Hence show that the acceleration of  $Q$  is  $0.98 \text{ m s}^{-2}$ . (2)

(c) Find the tension in the string. (2)

(d) State where in your calculations you have used the information that the string is inextensible. (1)

On release,  $Q$  is at a height of 0.8 m above the ground. When  $Q$  reaches the ground, it is brought to rest immediately by the impact with the ground and does not rebound. The initial distance of  $P$  from  $A$  is such that in the subsequent motion  $P$  does not reach  $A$ . Find

(e) the speed of  $Q$  as it reaches the ground, (2)

(f) the time between the instant when  $Q$  reaches the ground and the instant when the string becomes taut again. (5)

---

---

---

---

---

---

---

---



**Question 7 continued**

Ruled lines for writing answers.

Q7

**(Total 16 marks)**

**TOTAL FOR PAPER: 75 MARKS**

**END**

