

Tuesday 3 June 2014 – Afternoon

AS GCE CHEMISTRY A

F322/01 Chains, Energy and Resources

Candidates answer on the Question Paper.


OCR supplied materials:

- *Data Sheet for Chemistry A* (inserted)

Other materials required:

- Scientific calculator

Duration: 1 hour 45 minutes




Candidate forename		Candidate surname	
--------------------	--	-------------------	--

Centre number						Candidate number				
---------------	--	--	--	--	--	------------------	--	--	--	--

INSTRUCTIONS TO CANDIDATES

- The Insert will be found inside this document.
- Write your name, centre number and candidate number in the boxes above. Please write clearly and in capital letters.
- Use black ink. HB pencil may be used for graphs and diagrams only.
- Answer **all** the questions.
- Read each question carefully. Make sure you know what you have to do before starting your answer.
- Write your answer to each question in the space provided. If additional space is required, you should use the lined pages at the end of this booklet. The question number(s) must be clearly shown.
- Do **not** write in the bar codes.

INFORMATION FOR CANDIDATES

- The number of marks is given in brackets [] at the end of each question or part question.
-  Where you see this icon you will be awarded marks for the quality of written communication in your answer.

This means for example you should:


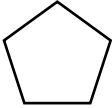
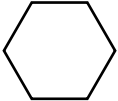
- ensure that text is legible and that spelling, punctuation and grammar are accurate so that meaning is clear;
- organise information clearly and coherently, using specialist vocabulary when appropriate.
- You may use a scientific calculator.
- A copy of the *Data Sheet for Chemistry A* is provided as an insert with this question paper.
- You are advised to show all the steps in any calculations.
- The total number of marks for this paper is **100**.
- This document consists of **24** pages. Any blank pages are indicated.

PLEASE DO NOT WRITE ON THIS PAGE

Answer **all** the questions.

- 1 This question is about cyclic organic compounds.

The table shows some information about cycloalkanes.

Cycloalkane	Skeletal formula	Boiling point/ $^{\circ}\text{C}$
Cyclopropane		-33
Cyclopentane		49
Cyclohexane		81

- (a) These cycloalkanes are members of the same homologous series and have the same general formula.

- (i) What is meant by the term *homologous series*?

.....

 [2]

- (ii) State the general formula for these cycloalkanes.

..... [1]

- (iii) Explain the increase in boiling points of the cycloalkanes shown in the table.

.....

 [2]

- (b) The C–C–C bond angles in **cyclohexane** are 109.5° .

State and explain the shape around each carbon atom in cyclohexane.

shape

explanation

..... [2]

- (c) In the absence of ultraviolet radiation, **cyclopropane** undergoes an addition reaction with bromine.

Suggest the structure of the organic product formed in this reaction.

[1]

- (d) Petrol contains both **cyclohexane**, C_6H_{12} , and hexane.

Cyclohexane can be prepared from hexane.

- (i) Construct the equation for this reaction.

..... [1]

- (ii) Suggest **one** advantage of adding cyclohexane to hexane in petrol.

..... [1]

- (e) **Cyclobutane** is another cycloalkane.

There are several **unsaturated** isomers of cyclobutane that are alkenes.

Two of these isomers are stereoisomers.

- (i) Explain what is meant by the term *stereoisomers*.

..... [1]

- (ii) Draw these **two** stereoisomers.

[2]

(f) In the presence of ultraviolet radiation, **cyclohexane** reacts with bromine.

A mixture of cyclic organic compounds is formed, including $C_6H_{11}Br$.

(i) Complete the table below to show the mechanism of the reaction between bromine and cyclohexane to form $C_6H_{11}Br$.

Include all possible termination steps in your answer.

Step	Equation
Initiation
Propagation
Termination

[5]

(ii) The initiation step involves homolytic fission.

Explain why the initiation step is an example of *homolytic fission*.

.....
.....
..... [1]

(g) The reaction between cyclohexane and bromine in (f) also forms $C_6H_{10}Br_2$.

(i) Write an equation, using molecular formulae, for the reaction of cyclohexane and bromine in the presence of ultraviolet radiation to form $C_6H_{10}Br_2$.

..... [1]

(ii) Name **one** of the structural isomers of $C_6H_{10}Br_2$ formed in the reaction between cyclohexane and bromine.

..... [1]

[Total: 21]

2 1-Bromobutane, $\text{CH}_3\text{CH}_2\text{CH}_2\text{CH}_2\text{Br}$, reacts with methoxide ions, CH_3O^- , by nucleophilic substitution.

(a) Suggest how the methoxide ion can act as a nucleophile.

.....
 [1]

(b) Using the 'curly arrow' model, suggest the mechanism for this reaction.

Show any relevant dipoles.

[3]

(c) 1-Iodobutane also reacts with methoxide ions.

Indicate, by placing a tick in one of the boxes, how the use of 1-iodobutane would affect the rate of reaction compared with that of 1-bromobutane.

1-Iodobutane does not change the rate	
1-Iodobutane increases the rate	
1-Iodobutane decreases the rate	

Explain your answer.

.....

 [1]

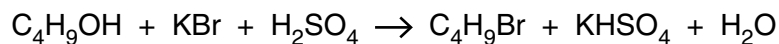
(d) The ethanoate ion, CH_3COO^- also acts as a nucleophile when reacting with 1-bromobutane in a substitution reaction.

Draw the skeletal formula and give the name of the organic product formed in this reaction.

skeletal formula

name of product [2]

- (e) 1-Bromobutane (M_r , 136.9) can be made from a reaction of butan-1-ol, C_4H_9OH , as shown in the equation below.



- (i) Calculate the atom economy for the formation of 1-bromobutane in this reaction.

atom economy = % [1]

- (ii) Suggest a reactant, other than a different acid, that could be used to improve the atom economy of making 1-bromobutane by the same method.

..... [1]

- (iii) A student prepares a sample of 1-bromobutane.

5.92 g of butan-1-ol are reacted with an excess of sulfuric acid and potassium bromide. After purification, 9.72 g of 1-bromobutane are collected.

Calculate the percentage yield.

Give your answer to **three** significant figures.

percentage yield = % [3]

[Total: 12]

Turn over

- 3 Hydrogen iodide, HI, is a colourless gas that can be made from the reaction of hydrogen, H₂, and iodine, I₂.

This reversible reaction is shown in **equilibrium 3.1** below.

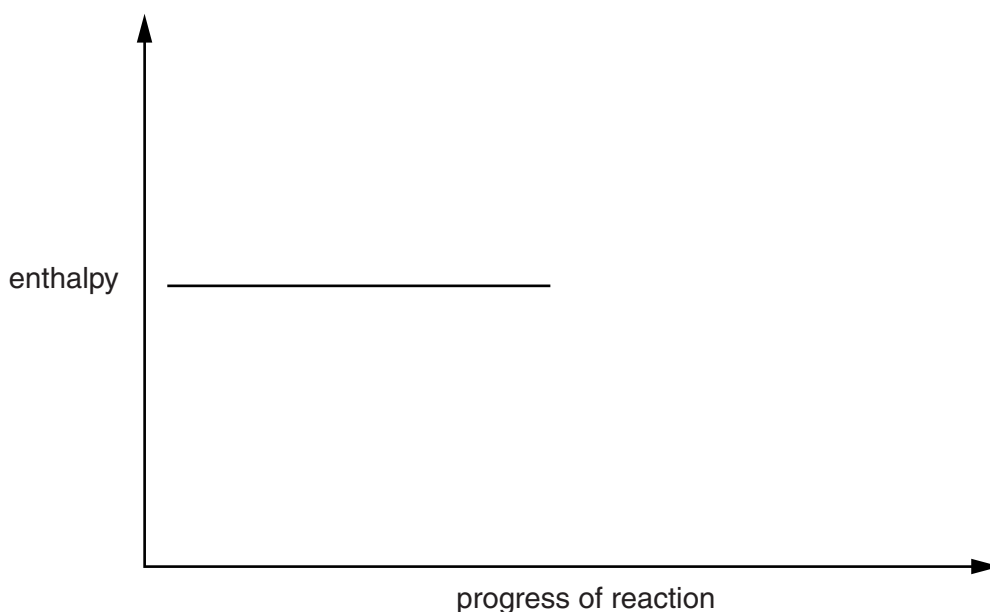


The activation energy for the forward reaction is 173 kJ mol⁻¹.

- (a) Complete the enthalpy profile diagram below for the forward reaction in **equilibrium 3.1**.

On your diagram:

- Label the activation energy, E_a
- Label the enthalpy change of reaction, ΔH
- Include the formulae of the reactants and products.



[2]

- (b) Calculate the activation energy, E_a , for the reverse reaction.

$$E_a \text{ (reverse reaction)} = \dots\dots\dots \text{ kJ mol}^{-1} \quad [1]$$

- (c) When the reverse reaction takes place hydrogen iodide, HI, decomposes to form iodine and hydrogen.

Calculate the enthalpy change when 336 dm³ of hydrogen iodide, measured at room temperature and pressure, decomposes.

Include the sign for enthalpy change in your answer.

enthalpy change kJ [2]

- (d) A student mixes hydrogen and iodine at room temperature and pressure and allows the mixture to reach dynamic equilibrium.



- (i) A closed system is required for dynamic equilibrium to be established.

State **one** other feature of this dynamic equilibrium.

.....
 [1]

- (ii) The student heats the equilibrium mixture keeping the volume constant.

Predict how the composition of the equilibrium mixture changes on heating.

Explain your answer.

.....

 [2]

- (iii) Predict and explain what effect, if any, an increase in the pressure would have on the position of the equilibrium.

effect

explanation

..... [1]

- (e) Calculate the bond enthalpy for the H–I bond in **equilibrium 3.1**, given the following information.

Bond	Bond Enthalpy/kJ mol ⁻¹
H–H	436
I–I	151


bond enthalpy kJ mol⁻¹ [2]

[Total: 11]

Turn over

4 This question is about the determination of enthalpy changes.

- (a) A student carries out an experiment to find the enthalpy change of reaction, ΔH_r , for the reaction below.



In the experiment, 3.18 g of Na_2CO_3 are added to 50.0 g of 2.00 mol dm^{-3} HCl , an excess. The temperature of the reaction mixture increases by 5.5°C .

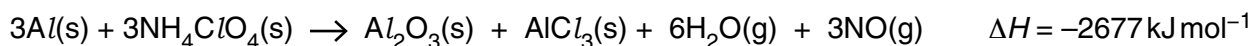
Calculate ΔH_r , in kJ mol^{-1} .

Give your answer to **three** significant figures.

The specific heat capacity, c , of the reaction mixture is $4.18 \text{ J g}^{-1} \text{ K}^{-1}$.

$\Delta H_r = \dots\dots\dots \text{ kJ mol}^{-1}$ [4]

- (b) The booster rocket of a spacecraft uses a mixture of aluminium and ammonium chlorate(VII), NH_4ClO_4 , as a fuel. The equation and some enthalpy changes are shown below.



Substance	Standard enthalpy change of formation, $\Delta H_f^\circ / \text{kJ mol}^{-1}$
$\text{NH}_4\text{ClO}_4(s)$	-295
$\text{Al}_2\text{O}_3(s)$	-1676
$\text{AlCl}_3(s)$	-704
$\text{H}_2\text{O}(g)$	-242

- (i) What is meant by the term *standard enthalpy change of formation*?

Give the standard conditions.

.....

.....

.....

.....

..... [3]

- (ii) Write the equation, including state symbols, for the reaction that represents the standard enthalpy change of formation of $\text{NH}_4\text{ClO}_4(s)$.

..... [2]

- (iii) Calculate the enthalpy change of formation of $\text{NO}(g)$ using the data above.

enthalpy change of formation of $\text{NO}(g) = \dots\dots\dots \text{kJ mol}^{-1}$ [3]
[Total: 12]

5 Chloroethene, CH_2CHCl , can be polymerised to form poly(chloroethene).

(a) Write an equation, using displayed formulae, to show the formation of this polymer.

[2]

(b) Incineration of plastics containing poly(chloroethene) produces waste gases that can damage the environment.

Incineration carried out in the presence of oxygen produces carbon dioxide, carbon monoxide and hydrogen chloride as waste gases and one other non-toxic product.

(i) Write an equation for the incineration of the monomer, chloroethene, with oxygen.

[1]

(ii) Chemists have developed ways of removing hydrogen chloride from these waste gases. Sodium hydrogencarbonate, $\text{NaHCO}_3(\text{s})$, is frequently used in industry for this purpose.

Explain how sodium hydrogencarbonate removes hydrogen chloride.

..... [1]

(c) Carbon dioxide is a greenhouse gas that is linked to global warming.

The greenhouse effect of carbon dioxide in the atmosphere is dependent on two factors.

What are these **two** factors?

- 1
-
- 2
-

[2]

(d) Chemists are trying to minimise climate change as a result of global warming.

One way is to use Carbon Capture and Storage (CCS). One method of CCS is to react the carbon dioxide with metal oxides.

(i) Write an equation to illustrate this method of CCS.

..... [1]

(ii) State one other method of CCS.

.....
..... [1]

[Total: 8]

6 (a) Reaction rates can be increased or decreased by changing conditions of temperature and pressure.


(i) Explain how increasing the temperature increases the rate of reaction.

Include a labelled sketch of the Boltzmann distribution, on the grid below.

Label the axes.



Your answer needs to be clear and well organised using the correct terminology.



.....
.....
.....
.....
.....
.....

[4]

(ii) Describe and explain the effect of decreasing the pressure on the rate of a reaction.

.....
.....
.....
.....
..... [2]

(b) Catalysts are used to speed up chemical reactions.

(i) Write an equation for an industrial preparation of ethanol which involves the use of an enzyme in yeast.

State a suitable temperature for this reaction and **one** other essential condition.

equation

temperature °C.

condition

[2]

(ii) Catalytic converters are used to decrease the emission of nitrogen monoxide and carbon monoxide from the internal combustion engine. These two gases react together on the surface of the catalyst.

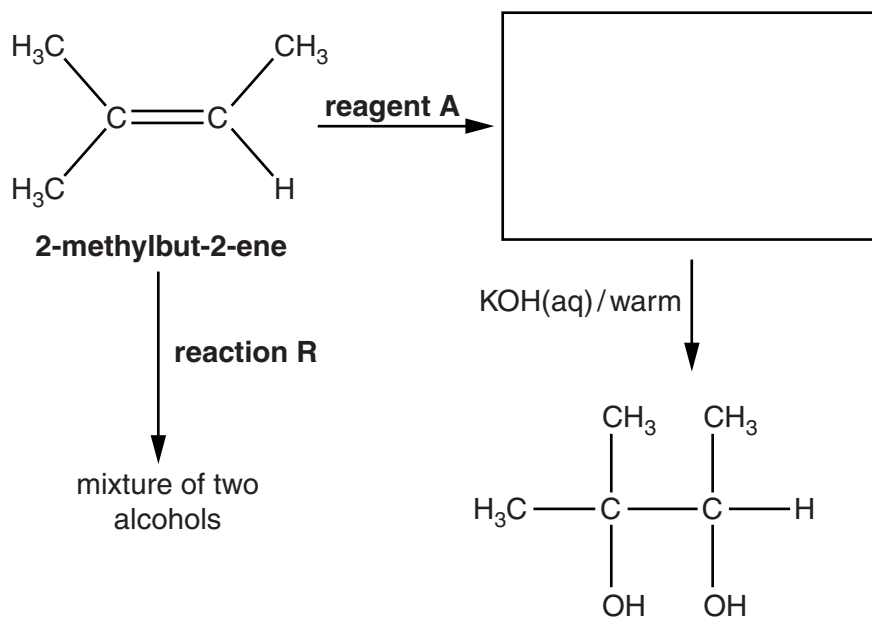
Write an equation for this reaction.

..... [1]

[Total: 9]

7 The flowchart shows how 2-methylbut-2-ene can be converted into a number of organic products.

(a) Complete the flowchart by drawing an organic structure in the box below.



[1]

(b) Identify reagent **A**.

..... [1]

(c) In the flowchart, **reaction R** forms a mixture of two alcohols that are structural isomers of $\text{C}_5\text{H}_{12}\text{O}$.

(i) State the reagents and conditions needed for **reaction R**.

..... [1]

(ii) What is meant by the term *structural isomers*?

.....

..... [1]

(iii) Draw the two structural isomers of $\text{C}_5\text{H}_{12}\text{O}$ formed in **reaction R**.

[2]

BLANK PAGE

Question 8 continues on page 20

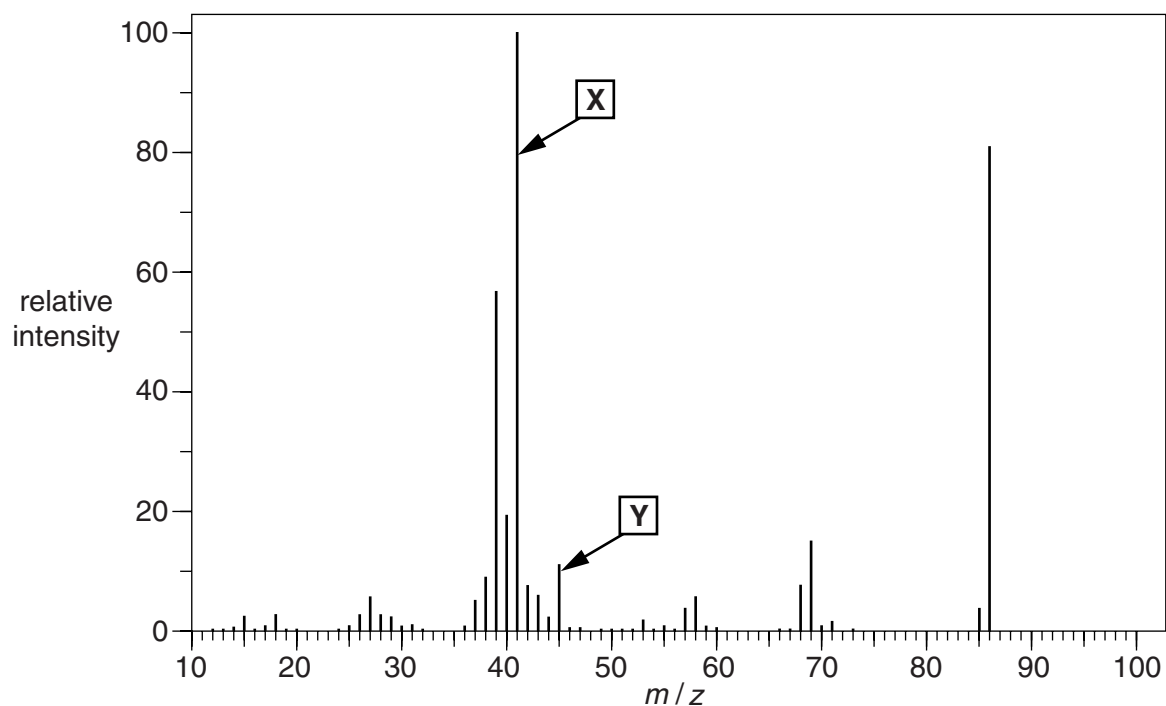
PLEASE DO NOT WRITE ON THIS PAGE

(b) Compound **G** is a branched-chain organic compound that does **not** have *E* and *Z* isomers.

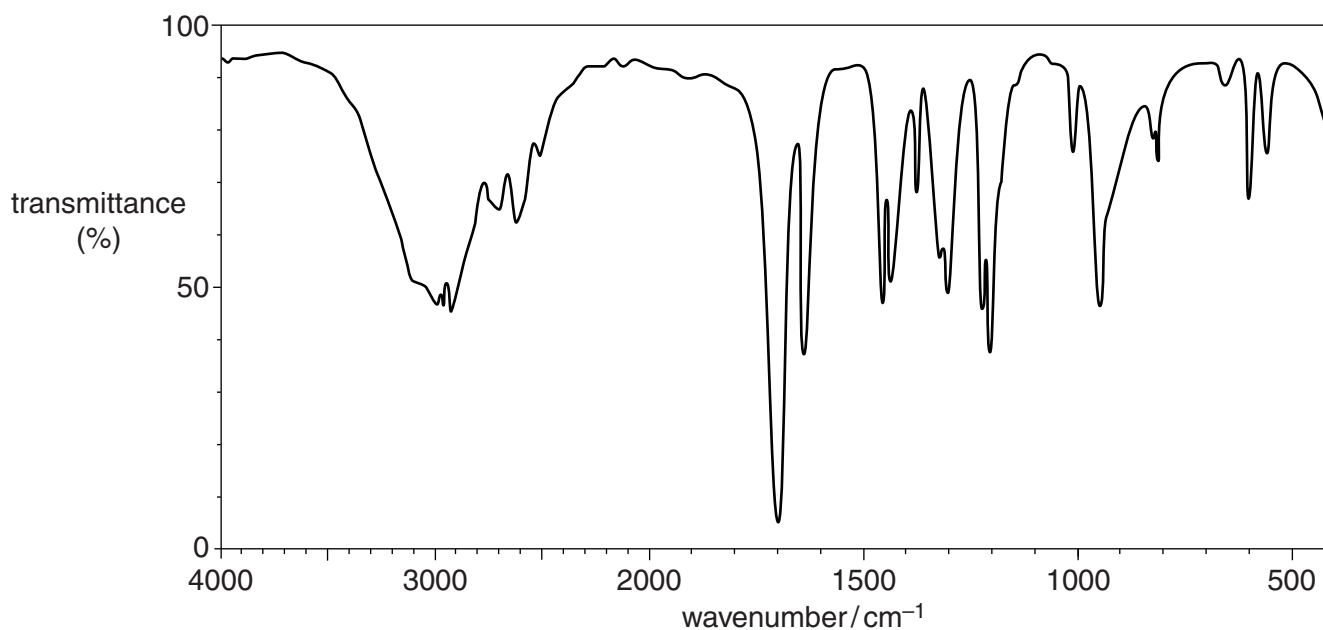
Elemental analysis of compound **G** gave the following percentage composition by mass: C, 55.8%; H, 7.0%; O, 37.2%.

The mass spectrum and infrared spectrum of compound **G** are shown below.

Mass spectrum



Infrared spectrum



ADDITIONAL ANSWER SPACE

If additional answer space is required, you should use the following lined page(s). The question number(s) must be clearly shown in the margins.

A large area of lined paper for writing answers. It features a vertical margin line on the left side and horizontal dotted lines for writing. The lines are evenly spaced and extend across the width of the page.

A large rectangular area with a solid vertical line on the left side and horizontal dotted lines extending across the page, providing a grid for writing answers.



Copyright Information

OCR is committed to seeking permission to reproduce all third-party content that it uses in its assessment materials. OCR has attempted to identify and contact all copyright holders whose work is used in this paper. To avoid the issue of disclosure of answer-related information to candidates, all copyright acknowledgements are reproduced in the OCR Copyright Acknowledgements Booklet. This is produced for each series of examinations and is freely available to download from our public website (www.ocr.org.uk) after the live examination series.

If OCR has unwittingly failed to correctly acknowledge or clear any third-party content in this assessment material, OCR will be happy to correct its mistake at the earliest possible opportunity.

For queries or further information please contact the Copyright Team, First Floor, 9 Hills Road, Cambridge CB2 1GE.

OCR is part of the Cambridge Assessment Group; Cambridge Assessment is the brand name of University of Cambridge Local Examinations Syndicate (UCLES), which is itself a department of the University of Cambridge.