

**ADVANCED SUBSIDIARY GCE**  
**MATHEMATICS**  
Core Mathematics 1

**4721/01**

Candidates answer on the Printed Answer Book

**OCR Supplied Materials:**

- Printed Answer Book (inserted)
- List of Formulae (MF1)

**Other Materials Required:**

None

**Wednesday 9 January 2008**  
**Afternoon**

**Duration:** 1 hour 30 minutes

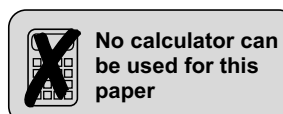


**INSTRUCTIONS TO CANDIDATES**

- Write your name clearly in capital letters, your Centre Number and Candidate Number in the spaces provided on the Printed Answer Book.
- Use black ink. Pencil may be used for graphs and diagrams only.
- Read each question carefully and make sure that you know what you have to do before starting your answer.
- Answer **all** the questions.
- Write your answer to each question in the space provided. If you need more space for an answer use additional paper; label your answer clearly and attach the additional paper securely to the Printed Answer Book.
- Do **not** write in the bar codes.
- Give non-exact numerical answers correct to 3 significant figures unless a different degree of accuracy is specified in the question or is clearly appropriate.
- **You are not permitted to use a calculator in this paper.**

**INFORMATION FOR CANDIDATES**

- The number of marks is given in brackets [ ] at the end of each question or part question.
- **You are reminded of the need for clear presentation in your answers.**
- The total number of marks for this paper is **72**.
- This document consists of **4** pages. Any blank pages are indicated.



Answer all questions on the Printed Answer Book provided.

- 1 Express  $\frac{4}{3 - \sqrt{7}}$  in the form  $a + b\sqrt{7}$ , where  $a$  and  $b$  are integers. [3]
- 2 (i) Write down the equation of the circle with centre  $(0, 0)$  and radius 7. [1]  
 (ii) A circle with centre  $(3, 5)$  has equation  $x^2 + y^2 - 6x - 10y - 30 = 0$ . Find the radius of the circle. [2]
- 3 Given that  $3x^2 + bx + 10 = a(x + 3)^2 + c$  for all values of  $x$ , find the values of the constants  $a$ ,  $b$  and  $c$ . [4]
- 4 Solve the equations  
 (i)  $10^p = 0.1$ , [1]  
 (ii)  $(25k^2)^{\frac{1}{2}} = 15$ , [3]  
 (iii)  $t^{-\frac{1}{3}} = \frac{1}{2}$ . [2]
- 5 (i) Sketch the curve  $y = x^3 + 2$ . [2]  
 (ii) Sketch the curve  $y = 2\sqrt{x}$ . [2]  
 (iii) Describe a transformation that transforms the curve  $y = 2\sqrt{x}$  to the curve  $y = 3\sqrt{x}$ . [3]
- 6 (i) Solve the equation  $x^2 + 8x + 10 = 0$ , giving your answers in simplified surd form. [3]  
 (ii) Sketch the curve  $y = x^2 + 8x + 10$ , giving the coordinates of the point where the curve crosses the  $y$ -axis. [3]  
 (iii) Solve the inequality  $x^2 + 8x + 10 \geq 0$ . [2]
- 7 (i) Find the gradient of the line  $l$  which has equation  $x + 2y = 4$ . [1]  
 (ii) Find the equation of the line parallel to  $l$  which passes through the point  $(6, 5)$ , giving your answer in the form  $ax + by + c = 0$ , where  $a$ ,  $b$  and  $c$  are integers. [3]  
 (iii) Solve the simultaneous equations  

$$y = x^2 + x + 1 \quad \text{and} \quad x + 2y = 4. \quad [4]$$

- 8 (i) Find the coordinates of the stationary points on the curve  $y = x^3 + x^2 - x + 3$ . [6]
- (ii) Determine whether each stationary point is a maximum point or a minimum point. [3]
- (iii) For what values of  $x$  does  $x^3 + x^2 - x + 3$  decrease as  $x$  increases? [2]
- 9 The points  $A$  and  $B$  have coordinates  $(-5, -2)$  and  $(3, 1)$  respectively.
- (i) Find the equation of the line  $AB$ , giving your answer in the form  $ax + by + c = 0$ . [3]
- (ii) Find the coordinates of the mid-point of  $AB$ . [2]
- The point  $C$  has coordinates  $(-3, 4)$ .
- (iii) Calculate the length of  $AC$ , giving your answer in simplified surd form. [3]
- (iv) Determine whether the line  $AC$  is perpendicular to the line  $BC$ , showing all your working. [4]
- 10 Given that  $f(x) = 8x^3 + \frac{1}{x^3}$ ,
- (i) find  $f''(x)$ , [5]
- (ii) solve the equation  $f(x) = -9$ . [5]

---

Permission to reproduce items where third-party owned material protected by copyright is included has been sought and cleared where possible. Every reasonable effort has been made by the publisher (OCR) to trace copyright holders, but if any items requiring clearance have unwittingly been included, the publisher will be pleased to make amends at the earliest possible opportunity.

OCR is part of the Cambridge Assessment Group. Cambridge Assessment is the brand name of University of Cambridge Local Examinations Syndicate (UCLES), which is itself a department of the University of Cambridge.

**ADVANCED SUBSIDIARY GCE**

**MATHEMATICS**

Core Mathematics 1

**4721/01**

**PRINTED ANSWER BOOK**

Candidates answer on the Printed Answer Book

**OCR Supplied Materials:**

- Question Paper 4721/01
- List of Formulae (MF1)

**Other Materials Required:**  
None

**Wednesday 9 January 2008**

**Afternoon**

**Duration:** 1 hour 30 minutes



Candidate Forename		Candidate Surname	
--------------------	--	-------------------	--

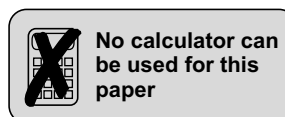
Centre Number						Candidate Number				
---------------	--	--	--	--	--	------------------	--	--	--	--

**INSTRUCTIONS TO CANDIDATES**

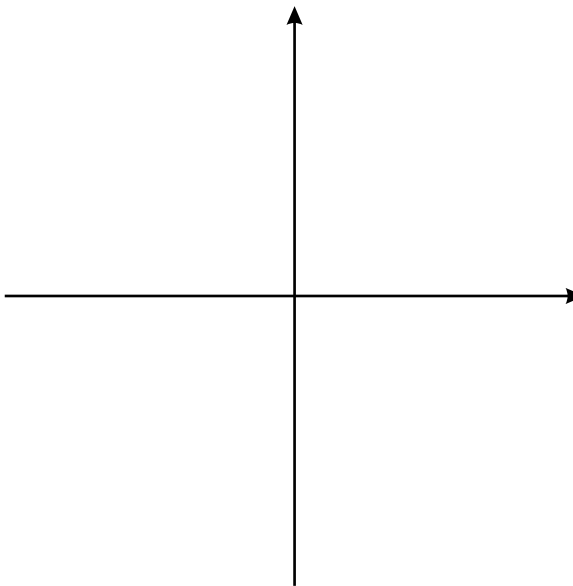
- Write your name clearly in capital letters, your Centre Number and Candidate Number in the boxes above.
- Use black ink. Pencil may be used for graphs and diagrams only.
- Answer **all** the questions.
- Do **not** write in the bar codes.
- **You are not permitted to use a calculator in this paper.**
- Write your answer to each question in the space provided. If you need more space for an answer use additional paper; label your answer clearly and attach the additional paper securely to the Printed Answer Book.

**INFORMATION FOR CANDIDATES**

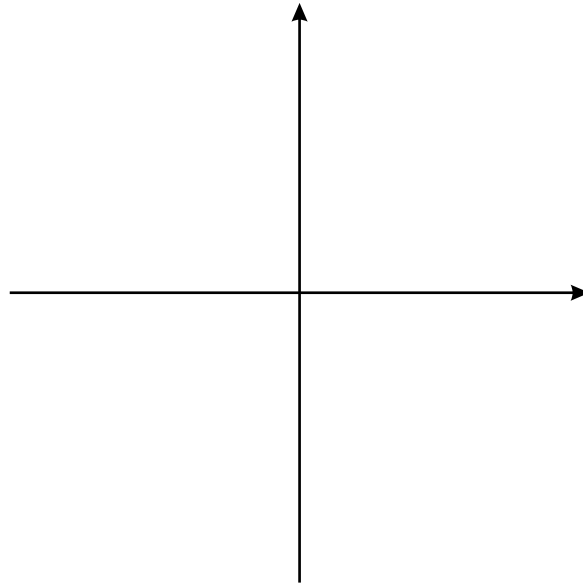
- This document consists of **12** pages. Any blank pages are indicated.



<b>1</b>	
<b>2 (i)</b>	
<b>2 (ii)</b>	
<b>3</b>	

<b>4 (i)</b>	
<b>4 (ii)</b>	
<b>4 (iii)</b>	
<b>5 (i)</b>	

5 (ii)



5 (iii)





<b>6 (iii)</b>	
<b>7 (i)</b>	
<b>7 (ii)</b>	





<b>8 (iii)</b>	
<b>9 (i)</b>	
<b>9 (ii)</b>	

<b>9 (iii)</b>	
<b>9 (iv)</b>	
<b>10 (i)</b>	

<b>10 (ii)</b>	

**PLEASE DO NOT WRITE ON THIS PAGE**



**Copyright Information**

OCR is committed to seeking permission to reproduce all third-party content that it uses in its assessment materials. OCR has attempted to identify and contact all copyright holders whose work is used in this paper. To avoid the issue of disclosure of answer-related information to candidates, all copyright acknowledgements are reproduced in the OCR Copyright Acknowledgements Booklet. This is produced for each series of examinations, is given to all schools that receive assessment material and is freely available to download from our public website ([www.ocr.org.uk](http://www.ocr.org.uk)) after the live examination series.

If OCR has unwittingly failed to correctly acknowledge or clear any third-party content in this assessment material, OCR will be happy to correct its mistake at the earliest possible opportunity.

For queries or further information please contact the Copyright Team, First Floor, 9 Hills Road, Cambridge CB2 1GE.

OCR is part of the Cambridge Assessment Group; Cambridge Assessment is the brand name of University of Cambridge Local Examinations Syndicate (UCLES), which is itself a department of the University of Cambridge.