

Friday 18 January 2013 – Afternoon

A2 GCE MATHEMATICS (MEI)

4754/01A Applications of Advanced Mathematics (C4) Paper A

QUESTION PAPER

Candidates answer on the Printed Answer Book.

OCR supplied materials:

- Printed Answer Book 4754/01A
- MEI Examination Formulae and Tables (MF2)

Other materials required:

- Scientific or graphical calculator

Duration: 1 hour 30 minutes



INSTRUCTIONS TO CANDIDATES

These instructions are the same on the Printed Answer Book and the Question Paper.

- The Question Paper will be found in the centre of the Printed Answer Book.
- Write your name, centre number and candidate number in the spaces provided on the Printed Answer Book. Please write clearly and in capital letters.
- **Write your answer to each question in the space provided in the Printed Answer Book.** Additional paper may be used if necessary but you must clearly show your candidate number, centre number and question number(s).
- Use black ink. HB pencil may be used for graphs and diagrams only.
- Read each question carefully. Make sure you know what you have to do before starting your answer.
- Answer **all** the questions.
- Do **not** write in the bar codes.
- You are permitted to use a scientific or graphical calculator in this paper.
- Final answers should be given to a degree of accuracy appropriate to the context.

INFORMATION FOR CANDIDATES

This information is the same on the Printed Answer Book and the Question Paper.

- The number of marks is given in brackets [] at the end of each question or part question on the Question Paper.
- You are advised that an answer may receive **no marks** unless you show sufficient detail of the working to indicate that a correct method is being used.
- The total number of marks for this paper is **72**.
- The Printed Answer Book consists of **16** pages. The Question Paper consists of **4** pages. Any blank pages are indicated.
- This paper will be followed by **Paper B: Comprehension**.

INSTRUCTION TO EXAMS OFFICER/INVIGILATOR

- Do not send this Question Paper for marking; it should be retained in the centre or recycled. Please contact OCR Copyright should you wish to re-use this document.

Section A (36 marks)

1 Solve the equation $\frac{2x}{x+1} - \frac{1}{x-1} = 1$. [4]

2 Find the first four terms of the binomial expansion of $\sqrt[3]{1-2x}$. State the set of values of x for which the expansion is valid. [6]

3 The parametric equations of a curve are

$$x = \sin \theta, \quad y = \sin 2\theta, \quad \text{for } 0 \leq \theta \leq 2\pi.$$

(i) Find the exact value of the gradient of the curve at the point where $\theta = \frac{1}{6}\pi$. [4]

(ii) Show that the cartesian equation of the curve is $y^2 = 4x^2 - 4x^4$. [3]

4 Fig. 4 shows the curve $y = \sqrt{1 + e^{2x}}$, and the region between the curve, the x -axis, the y -axis and the line $x = 2$.

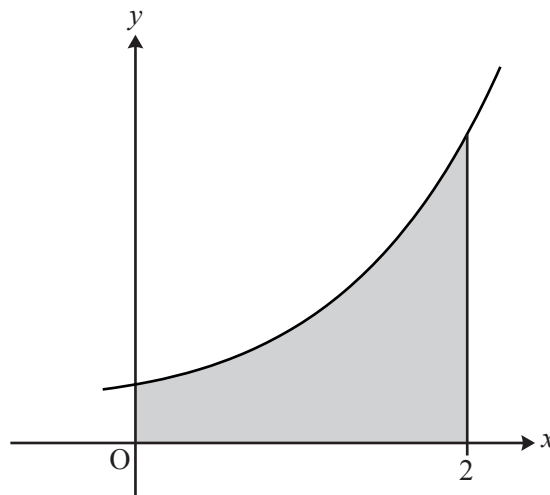


Fig. 4

(a) Find the exact volume of revolution when the shaded region is rotated through 360° about the x -axis. [4]

(b) (i) Complete the table of values, and use the trapezium rule with 4 strips to estimate the area of the shaded region. [3]

x	0	0.5	1	1.5	2
y		1.9283	2.8964	4.5919	

(ii) The trapezium rule for $\int_0^2 \sqrt{1 + e^{2x}} dx$ with 8 and 16 strips gives 6.797 and 6.823, although not necessarily in that order. Without doing the calculations, say which result is which, explaining your reasoning. [1]

- 5 Solve the equation $2 \sec^2 \theta = 5 \tan \theta$, for $0 \leq \theta \leq \pi$. [6]
- 6 In Fig. 6, ABC, ACD and AED are right-angled triangles and $BC = 1$ unit. Angles CAB and CAD are θ and ϕ respectively.

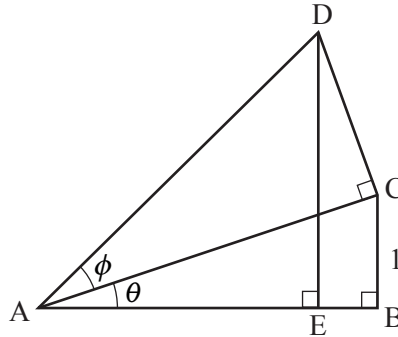


Fig. 6

- (i) Find AC and AD in terms of θ and ϕ . [2]
- (ii) Hence show that $DE = 1 + \frac{\tan \phi}{\tan \theta}$. [3]

Section B (36 marks)

- 7 A tent has vertices ABCDEF with coordinates as shown in Fig. 7. Lengths are in metres. The Oxy plane is horizontal.

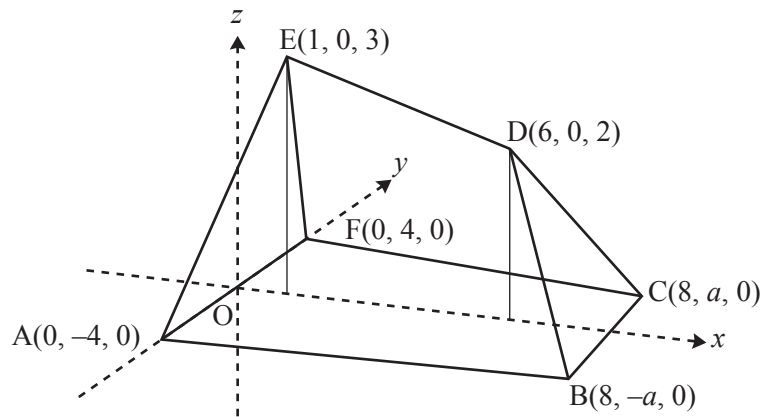


Fig. 7

- (i) Find the length of the ridge of the tent DE, and the angle this makes with the horizontal. [4]
- (ii) Show that the vector $\mathbf{i} - 4\mathbf{j} + 5\mathbf{k}$ is normal to the plane through A, D and E. [7]
Hence find the equation of this plane. Given that B lies in this plane, find a .
- (iii) Verify that the equation of the plane BCD is $x + z = 8$. [6]
Hence find the acute angle between the planes ABDE and BCD.

- 8 The growth of a tree is modelled by the differential equation

$$10 \frac{dh}{dt} = 20 - h,$$

where h is its height in metres and the time t is in years. It is assumed that the tree is grown from seed, so that $h = 0$ when $t = 0$.

- (i) Write down the value of h for which $\frac{dh}{dt} = 0$, and interpret this in terms of the growth of the tree. [1]
- (ii) Verify that $h = 20(1 - e^{-0.1t})$ satisfies this differential equation and its initial condition. [5]

The alternative differential equation

$$200 \frac{dh}{dt} = 400 - h^2$$

is proposed to model the growth of the tree. As before, $h = 0$ when $t = 0$.

- (iii) Using partial fractions, show by integration that the solution to the alternative differential equation is

$$h = \frac{20(1 - e^{-0.2t})}{1 + e^{-0.2t}}. \quad [9]$$

- (iv) What does this solution indicate about the long-term height of the tree? [1]
- (v) After a year, the tree has grown to a height of 2 m. Which model fits this information better? [3]

Copyright Information

OCR is committed to seeking permission to reproduce all third-party content that it uses in its assessment materials. OCR has attempted to identify and contact all copyright holders whose work is used in this paper. To avoid the issue of disclosure of answer-related information to candidates, all copyright acknowledgements are reproduced in the OCR Copyright Acknowledgements Booklet. This is produced for each series of examinations and is freely available to download from our public website (www.ocr.org.uk) after the live examination series.

If OCR has unwittingly failed to correctly acknowledge or clear any third-party content in this assessment material, OCR will be happy to correct its mistake at the earliest possible opportunity.

For queries or further information please contact the Copyright Team, First Floor, 9 Hills Road, Cambridge CB2 1GE.

OCR is part of the Cambridge Assessment Group; Cambridge Assessment is the brand name of University of Cambridge Local Examinations Syndicate (UCLES), which is itself a department of the University of Cambridge.

Friday 18 January 2013 – Afternoon

A2 GCE MATHEMATICS (MEI)

4754/01B Applications of Advanced Mathematics (C4) Paper B: Comprehension

QUESTION PAPER

Candidates answer on the Question Paper.

OCR supplied materials:

- Insert (inserted)
- MEI Examination Formulae and Tables (MF2)

Other materials required:

- Scientific or graphical calculator
- Rough paper

Duration: Up to 1 hour



Candidate forename		Candidate surname	
-----------------------	--	----------------------	--

Centre number						Candidate number				
---------------	--	--	--	--	--	------------------	--	--	--	--

INSTRUCTIONS TO CANDIDATES

- The insert will be found in the centre of this document.
- Write your name, centre number and candidate number in the boxes above. Please write clearly and in capital letters.
- Use black ink. HB pencil may be used for graphs and diagrams only.
- Answer **all** the questions.
- Read each question carefully. Make sure you know what you have to do before starting your answer.
- Write your answer to each question in the space provided. Additional paper may be used if necessary but you must clearly show your candidate number, centre number and question number(s).
- Do **not** write in the bar codes.
- The insert contains the text for use with the questions.
- You are permitted to use a scientific or graphical calculator in this paper.
- Final answers should be given to a degree of accuracy appropriate to the context.

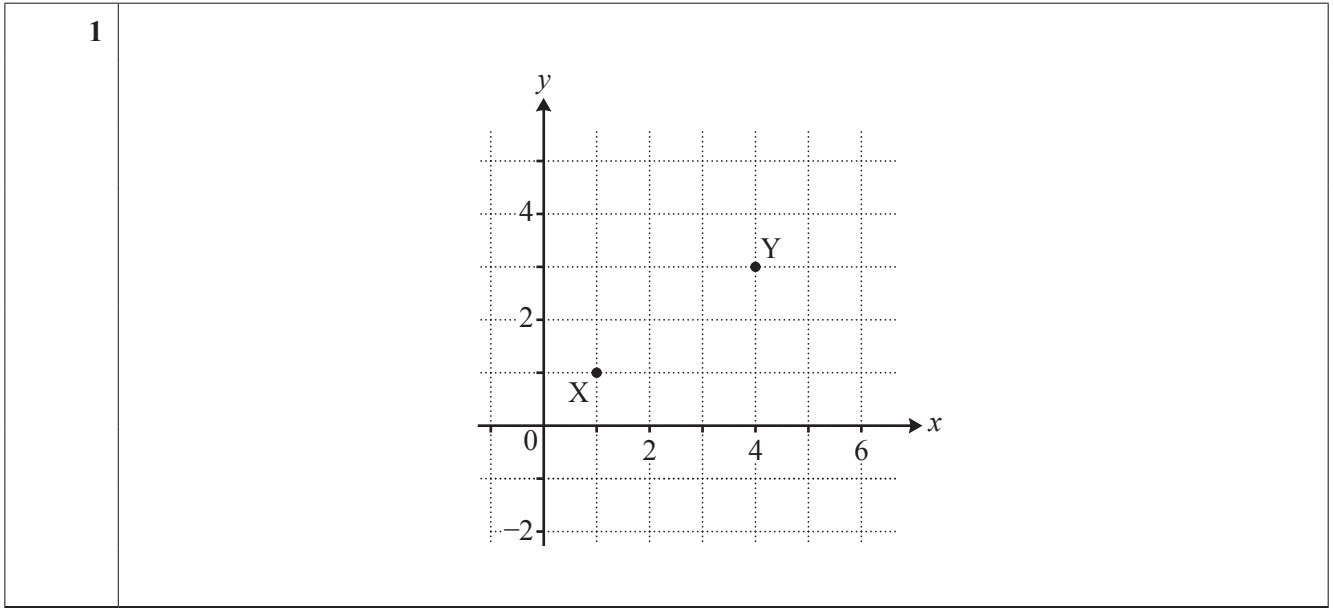
INFORMATION FOR CANDIDATES

- The number of marks is given in brackets [] at the end of each question or part question.
- You may find it helpful to make notes and do some calculations as you read the passage.
- You are **not** required to hand in these notes with your question paper.
- You are advised that an answer may receive **no marks** unless you show sufficient detail of the working to indicate that a correct method is being used.
- The total number of marks for this paper is **18**.
- This document consists of **8** pages. Any blank pages are indicated.

BLANK PAGE

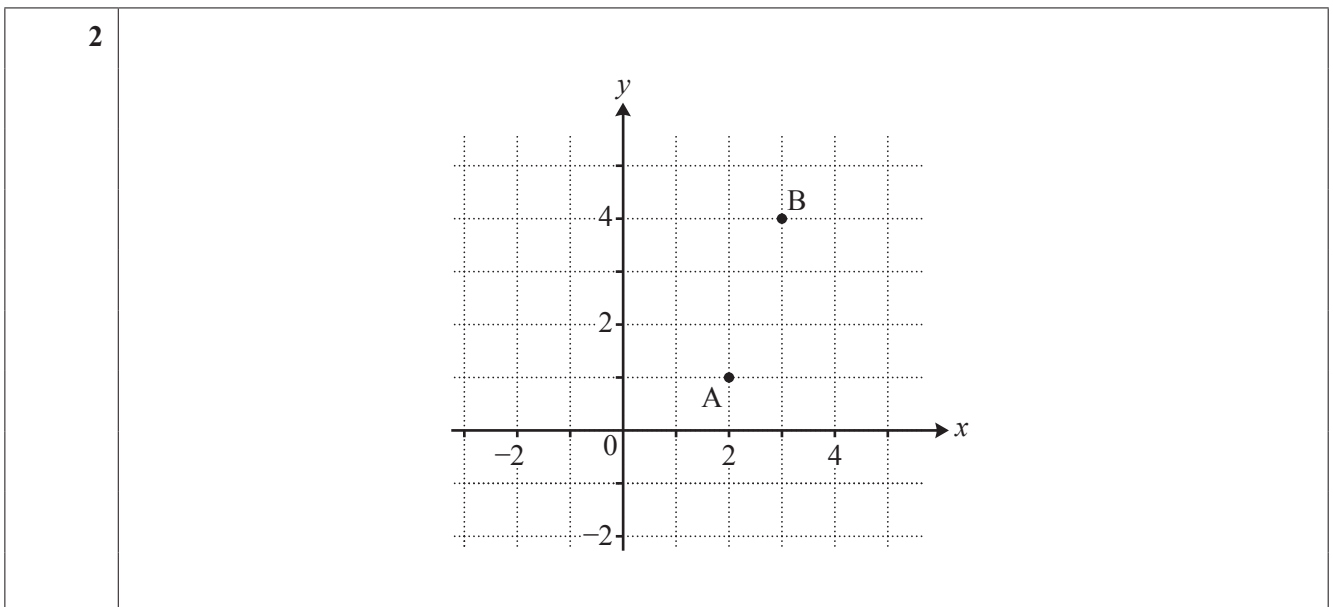
PLEASE DO NOT WRITE ON THIS PAGE

- 1 On the grid below mark all three possible positions of the point P with integer coordinates for which $t(P, X) = 4$ and $t(P, Y) = 3$. [3]

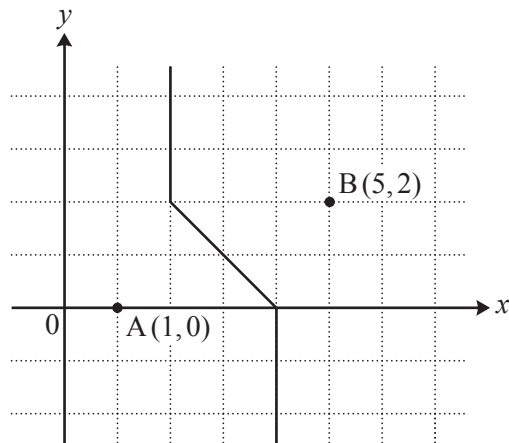


- 2 This question is concerned with generalised taxicab geometry.

On the grid below, show the locus of a point P where $t(P, A) = t(P, B)$. [3]

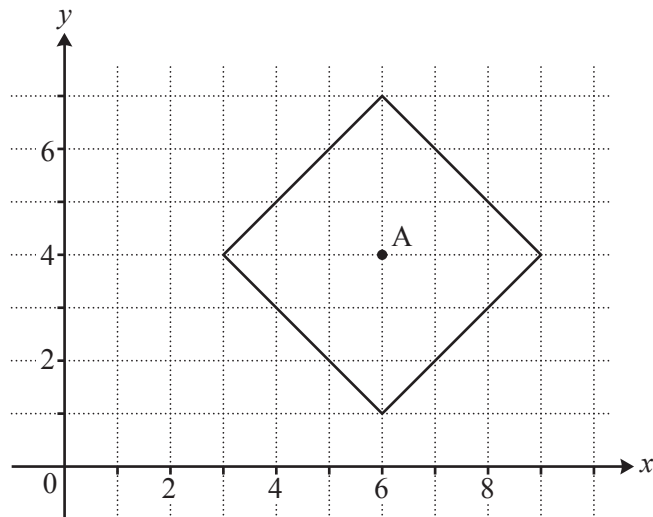


- 3 (i) Describe the following locus of a point P, using the notation $t(P,A)$ and $t(P,B)$ as appropriate.



[1]

- (ii) Describe the following locus of a point P, using the notation $t(P,A)$ as appropriate.



[1]

3 (i)	
3 (ii)	

PLEASE DO NOT WRITE IN THIS SPACE

4 Referring to Fig. 5, or otherwise, find the value of $n(4,4)$.

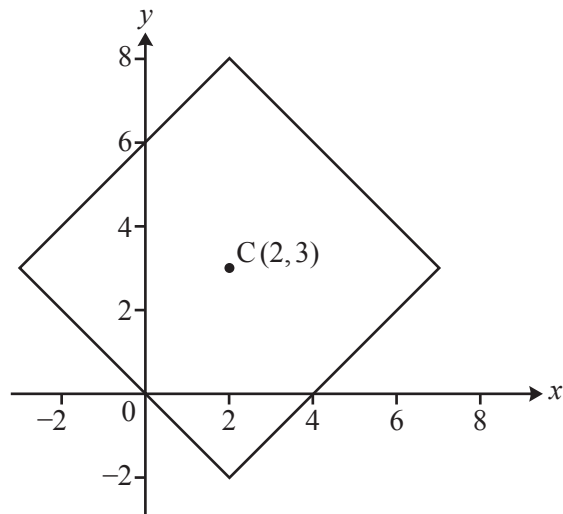
[2]

4	

5 In lines 54 and 55 it says there are 35 minimum distance routes from A $(0,0)$ to B $(4,3)$. Determine how many of these routes pass through the point with coordinates $(3,2)$, explaining your reasoning. [2]

5	

6 Fig. 7 is reproduced below.



(i) Two points on this locus have x -coordinate -0.7 . Write down the coordinates of each of these points. [2]

(ii) In lines 77 to 78 it says “adding a second taxicab circle with centre $(2,0)$ and radius 2 shows that in generalised taxicab geometry two different circles can have an infinite number of points in common!”

On the copy of Fig. 7 given below, draw the taxicab circle with centre $(2,0)$ and radius 2. [1]

6 (i)	
6 (ii)	

- 7 In lines 23 and 24 it says that “if the Pythagorean distance between two points A and B is $d(A,B)$ then the taxicab distance satisfies the inequalities $d(A,B) \leq t(A,B) \leq \sqrt{2} \times d(A,B)$.”

This question is about using this result in generalised taxicab geometry.

(i) Given that A is the point $(0,0)$, describe all possible positions of B for which $d(A,B) = t(A,B)$. [1]

(ii) Given that A is the point $(0,0)$, describe all possible positions of B for which $t(A,B) = \sqrt{2} \times d(A,B)$. [2]

7(i)	
7(ii)	



Copyright Information

OCR is committed to seeking permission to reproduce all third-party content that it uses in its assessment materials. OCR has attempted to identify and contact all copyright holders whose work is used in this paper. To avoid the issue of disclosure of answer-related information to candidates, all copyright acknowledgements are reproduced in the OCR Copyright Acknowledgements Booklet. This is produced for each series of examinations and is freely available to download from our public website (www.ocr.org.uk) after the live examination series.

If OCR has unwittingly failed to correctly acknowledge or clear any third-party content in this assessment material, OCR will be happy to correct its mistake at the earliest possible opportunity.

For queries or further information please contact the Copyright Team, First Floor, 9 Hills Road, Cambridge CB2 1GE.

OCR is part of the Cambridge Assessment Group; Cambridge Assessment is the brand name of University of Cambridge Local Examinations Syndicate (UCLES), which is itself a department of the University of Cambridge.